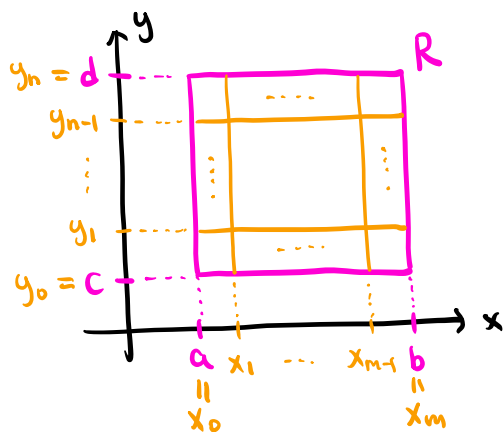


15.1. Double integrals over rectangles

Recall: For a function $f(x)$ defined on $[a, b]$, the integral $\int_a^b f(x) dx$ is defined as the limit of Riemann sums.

Def Let $f(x, y)$ be a function defined on a rectangle $R = [a, b] \times [c, d] := \{(x, y) \in \mathbb{R}^2 : a \leq x \leq b, c \leq y \leq d\}$.

(1) If R is divided into equal subrectangles R_{ij} each with area ΔA and a sample point (x_i^*, y_j^*) ,



$$R_{ij} = [x_{i-1}, x_i] \times [y_{j-1}, y_j]$$

$$\Delta A = \frac{1}{mn} (b-a)(d-c)$$

the sum $\sum_{i=1}^m \sum_{j=1}^n f(x_i^*, y_j^*) \Delta A$ is called a Riemann sum.

(2) The integral of $f(x, y)$ on R is given by

$$\iint_R f(x, y) dA := \lim_{m, n \rightarrow \infty} \sum_{i=1}^m \sum_{j=1}^n f(x_i^*, y_j^*) \Delta A.$$

Thm (Fubini's theorem)

If $f(x, y)$ is a continuous function on $R = [a, b] \times [c, d]$,

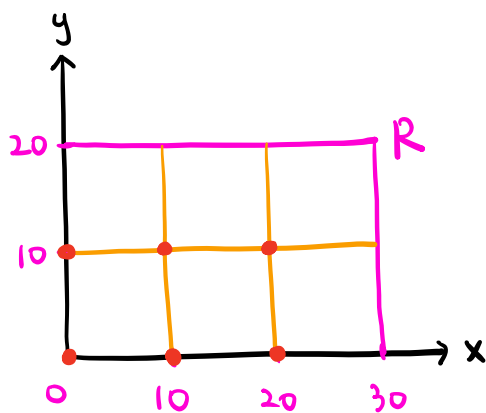
$$\iint_R f(x, y) dA = \int_a^b \int_c^d f(x, y) dy dx = \int_c^d \int_a^b f(x, y) dx dy.$$

Ex A 20-foot by 30-foot swimming pool is filled with water. The depth is measured at 10-foot intervals as follows:

	0	10	20	30
0	2	4	7	8
10	2	6	10	10
20	2	2	3	4

Estimate the volume of water.

Sol Use a Riemann sum with 10-foot intervals.



Each subrectangle has area

$$\Delta A = 10 \cdot 10 = 100$$

For each subrectangle, we take the lower left vertex to be the sample point.

Set $d(x,y)$ to be the depth at (x,y)

$$d(0,0) = 2, \quad d(10,0) = 4, \quad d(20,0) = 7,$$

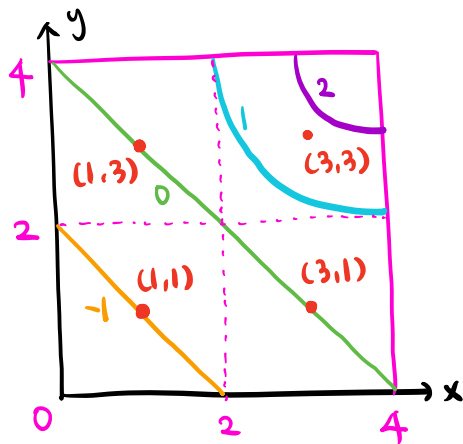
$$d(0,10) = 2, \quad d(10,10) = 6, \quad d(20,10) = 10$$

$$\Rightarrow \text{Riemann sum} = (2+4+7+2+6+10) \cdot 100 = 3100$$

$$\Rightarrow \text{Volume} \approx \boxed{3100 \text{ (ft}^3\text{)}}$$

Note You can use different sample points.

Ex A contour map of $f(x,y)$ on $R = [0,4] \times [0,4]$ is given as follows:



Use the midpoint rule with $m=n=2$ to estimate the integral $\iint_R f(x,y) dA$.

Sol The midpoint rule chooses sample points to be the midpoints of the subrectangles.

We divide R into 4 equal subrectangles, each with area $\Delta A = 2 \cdot 2 = 4$.

The sample points are $(1,1)$, $(1,3)$, $(3,1)$, $(3,3)$.

$f(1,1) = -1$, $f(1,3) = 0$, $f(3,1) = 0$, $f(3,3) \approx 1.6$.

Riemann sum $\approx (-1 + 0 + 0 + 1.6) \cdot 4 = 2.4$.

$\Rightarrow \iint_R f(x,y) dA \approx \boxed{2.4}$

Ex Evaluate $\iint_R \frac{x}{1+xy} dA$ where $R = [0,3] \times [0,2]$.

$$\underline{\text{Sol}} \iint_R \frac{x}{1+xy} dA = \int_0^3 \int_0^2 \frac{x}{1+xy} dy dx$$

$$(u = 1+xy \Rightarrow du = x dy)$$

$$= \int_0^3 \int_1^{1+2x} \frac{1}{u} du dx$$

$$= \int_0^3 \ln(u) \Big|_{u=1}^{u=1+2x} dx$$

$$= \int_0^3 \ln(1+2x) dx$$

$$(v = 1+2x \Rightarrow dv = 2 dx)$$

$$= \int_1^7 \ln(v) \cdot \frac{1}{2} dv$$

$$= \frac{1}{2} (v \ln(v) - v) \Big|_{v=1}^{v=7}$$

$$= \boxed{\frac{1}{2} (7 \ln(7) - 6)}$$

Note You can instead evaluate $\int_0^2 \int_0^3 \frac{x}{1+xy} dx dy$.

However, this integral is more difficult to

compute than the one we used above.